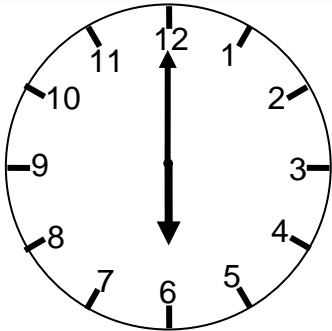
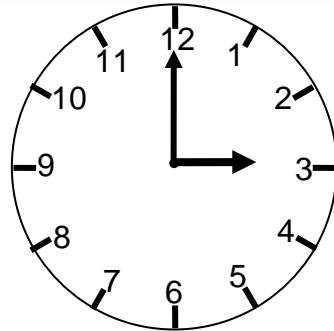


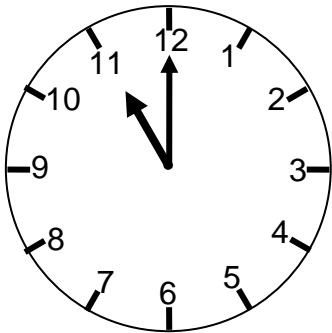
# Che ore sono?



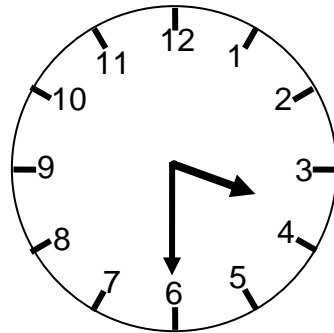
- SEI
- DODICI
- NOVE
- DIECI



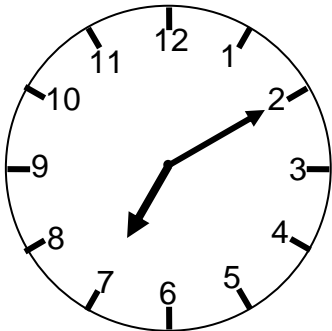
- NOVE
- SEI
- DODICI
- TRE



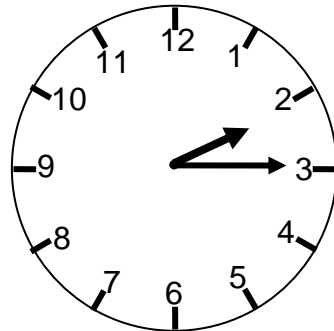
- UNDICI
- DODICI
- UNDICI E DODICI



- NOVE E VENTI
- SEI E QUARTO
- TRE E MEZZA

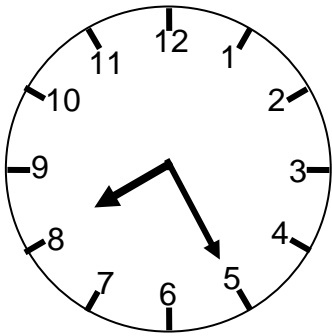


- DUE E MEZZA
- SETTE E DIECI
- SEI E MEZZA

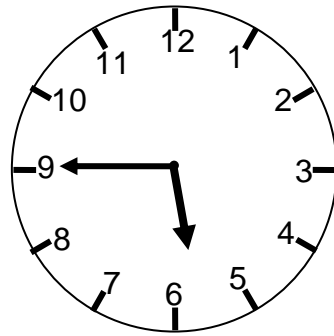


- DUE
- DUE E MEZZA
- DUE E UN QUARTO

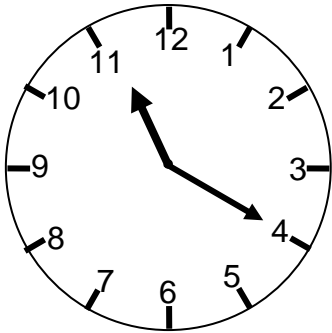
### Che ore sono?



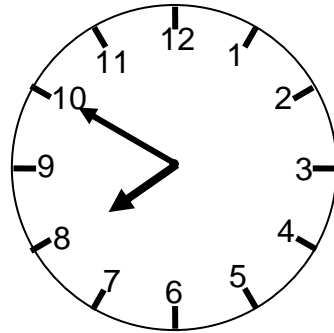
- 8:05
- 8:25
- 5:08
- 5:40



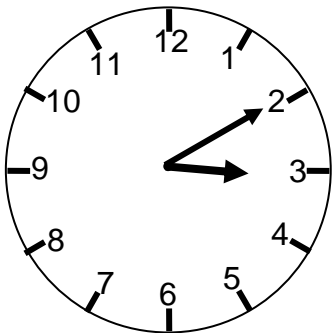
- 5:40
- 5:45
- 6:15
- 9:30



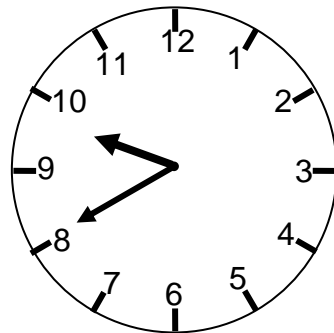
- 11:40
- 4:11
- 11:20
- 3:55



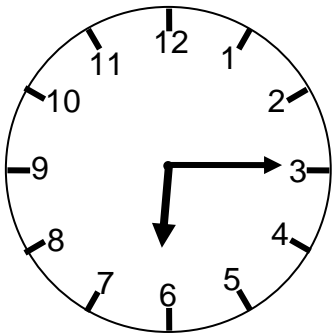
- 10:08
- 8:10
- 7:50
- 10:40



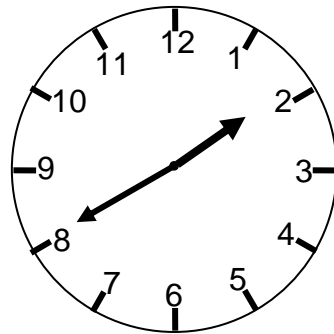
- 2:15
- 2:03
- 3:10
- 3:02



- 9:8
- 9:40
- 8:90
- 8:45

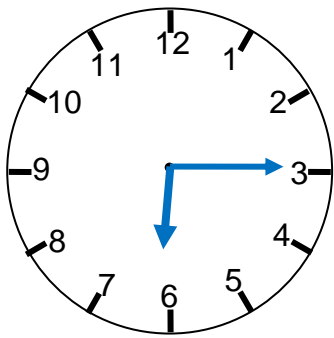


- 6:15
- 6:03
- 3:30
- 3:06

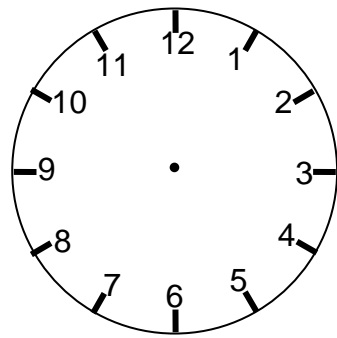


- 2:8
- 8:02
- 2:40
- 1:40

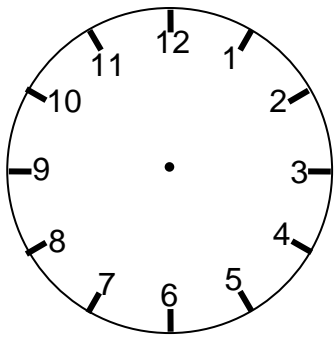
## Disegna le lancette



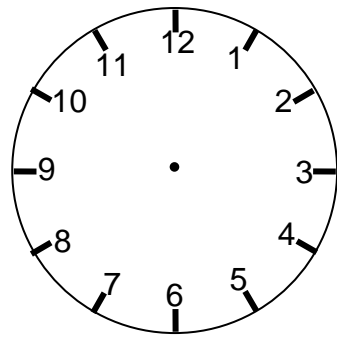
6:15



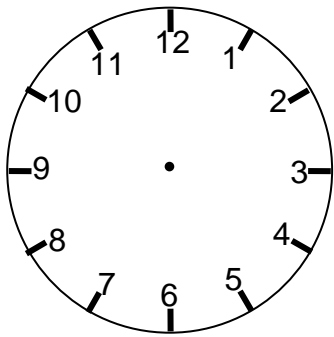
9:30



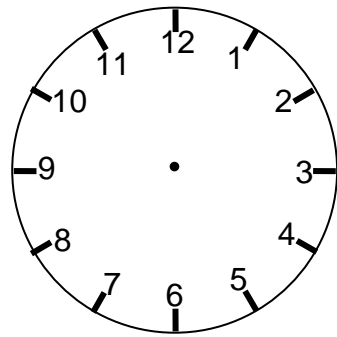
11:20



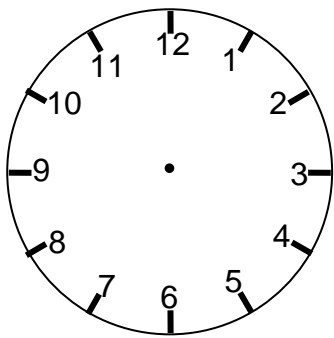
10:40



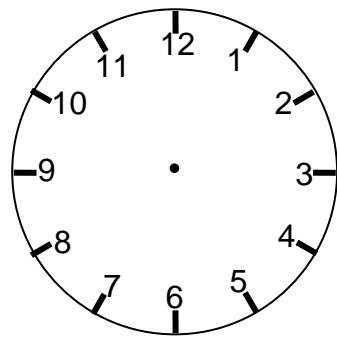
2:15



8:45

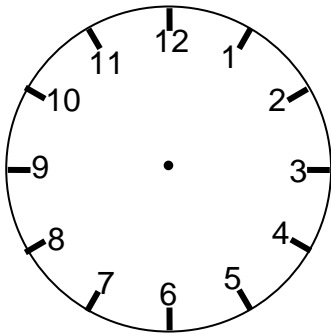


3:30

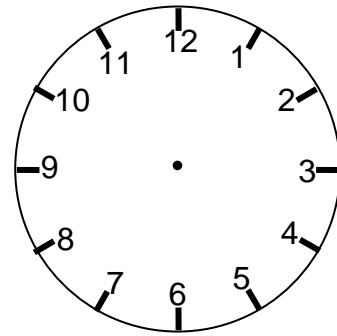


1:40

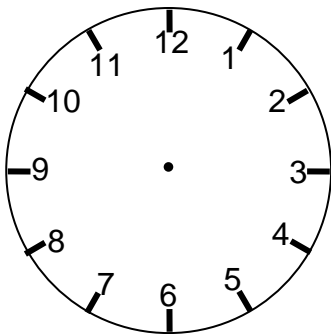
## Disegna le lancette



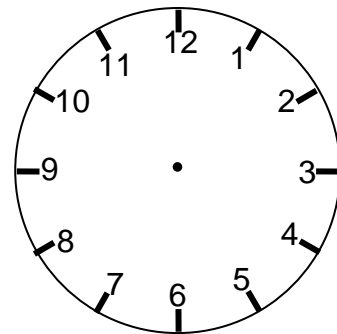
Dieci e dieci



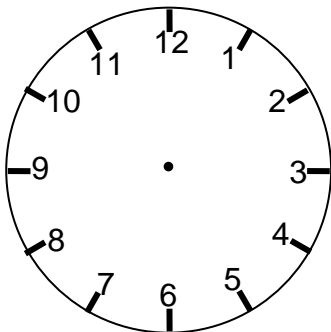
quattro meno dieci



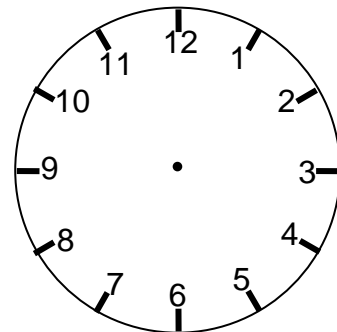
Undici e un quarto



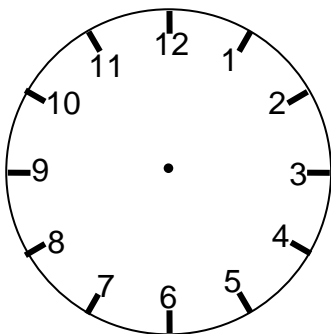
Due e quarantacinque



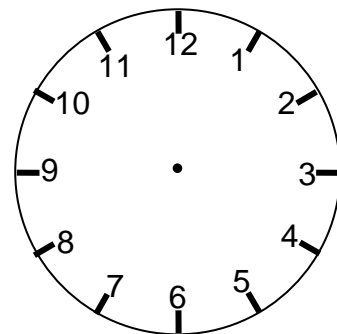
Due meno un quarto



Sette e venti di sera

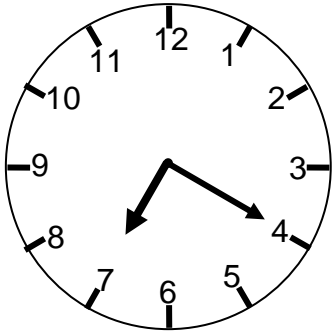


Una e mezza di pomeriggio

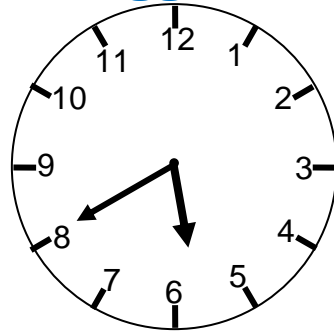


Sei meno cinque

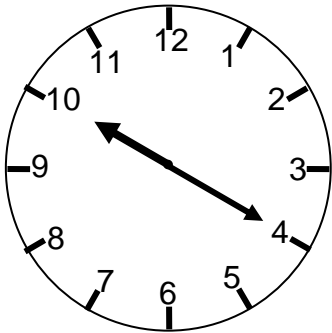
### Che ore sono di pomeriggio o sera?



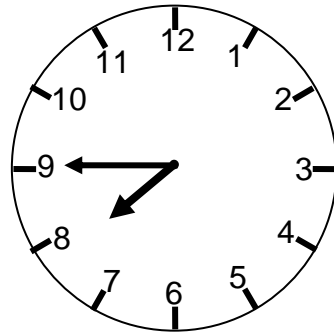
- 18:45       19:20  
 14:37       14:70



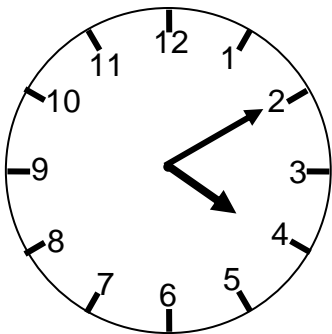
- 15:40       16:80  
 17:40       18:20



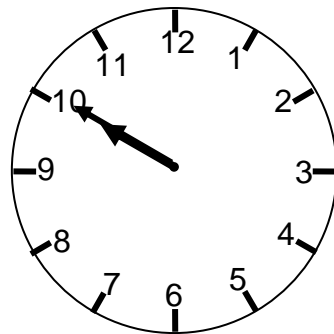
- 10:40       20:20  
 22:20       16:10



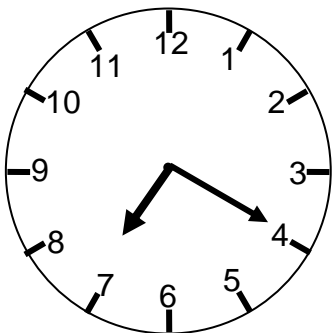
- 19:08       19:40  
 18:90       19:45



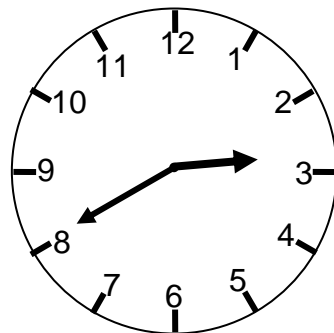
- 16:10       14:02  
 14:20       12:40



- 10:10       20:10  
 22:10       21:50

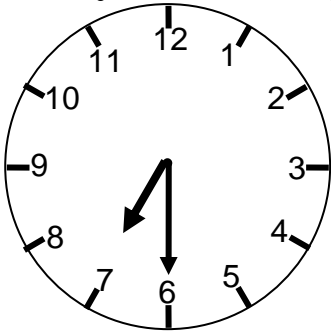


- 16:35       14:07  
 17:40       19:20

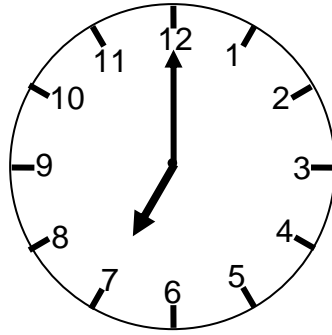


- 12:40       11:80  
 14:40       21:00

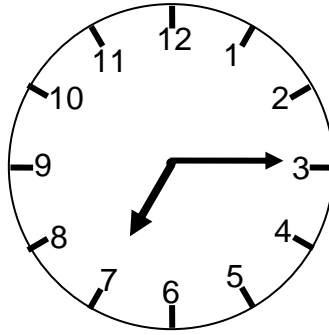
Quale orologio indica le 7 e 30?



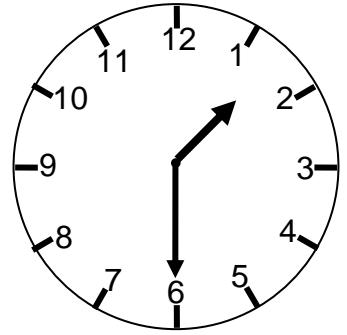
A.



B.

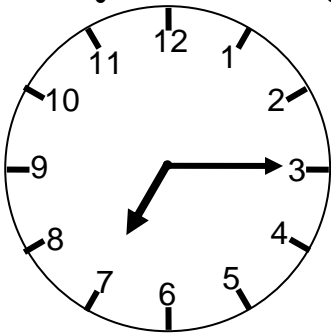


C.

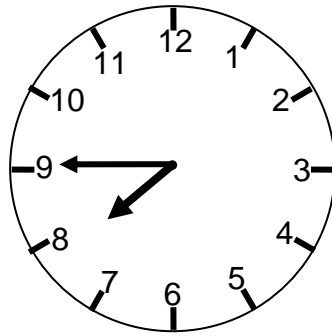


D.

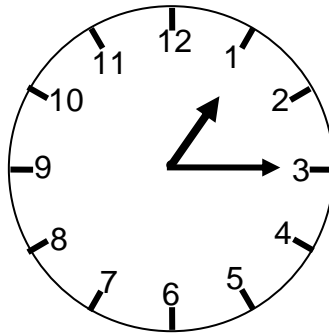
Quale orologio indica le 8 e 15?



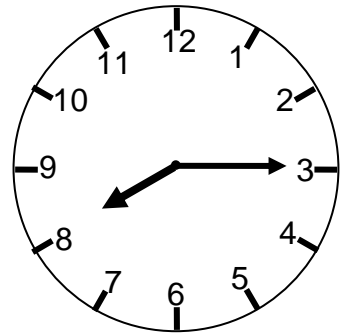
A.



B.

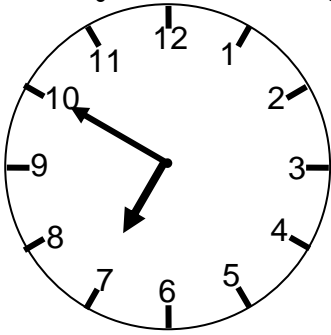


C.

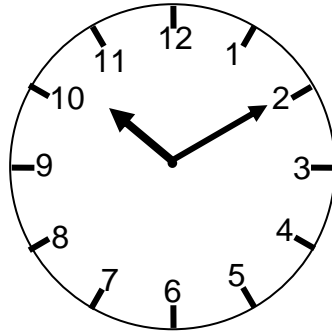


D.

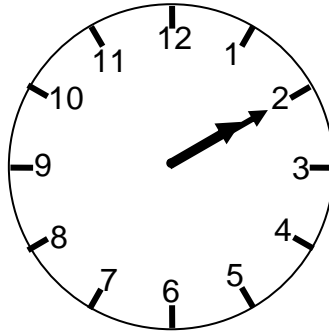
Quale orologio indica le 2 e 10?



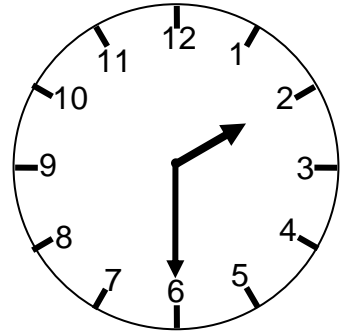
A.



B.




C.

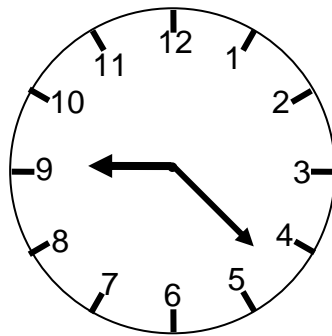


D.

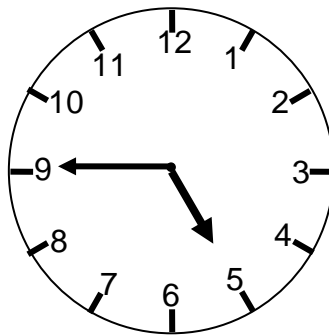
Quale orologio indica le 19 e 45?



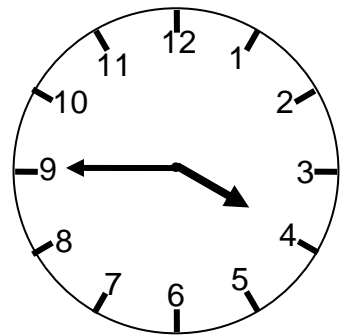
A.



B.

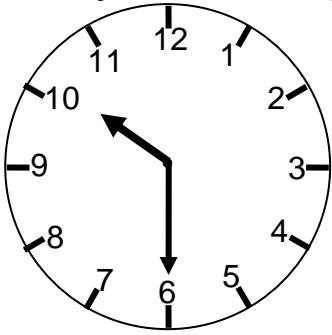


C.

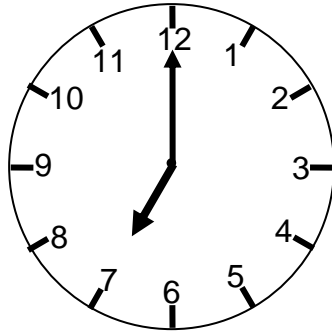


D.

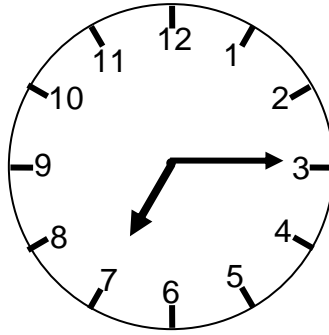
Quale orologio indica le 10 e 30?



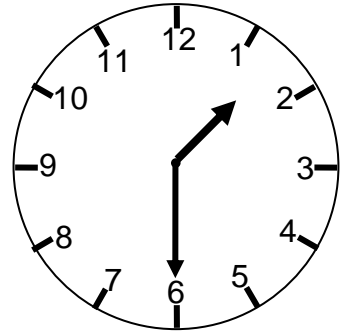
A.



B.

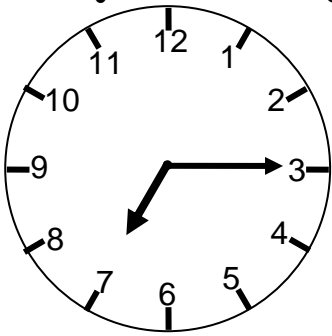


C.

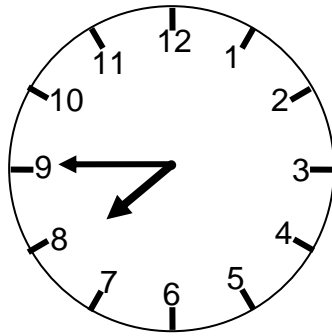


D.

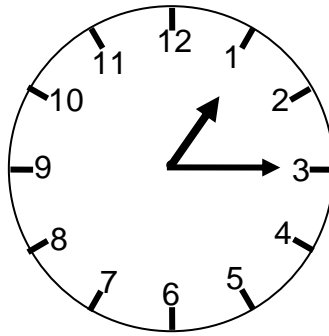
Quale orologio indica le 9 e 35?



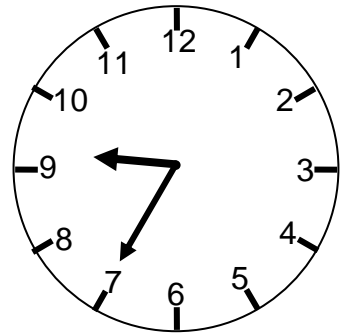
A.



B.

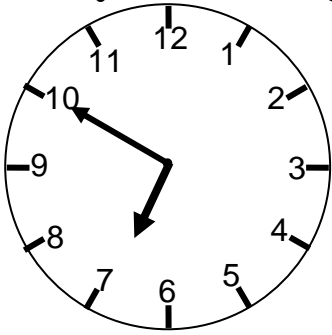


C.

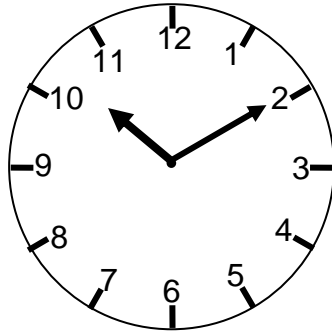


D.

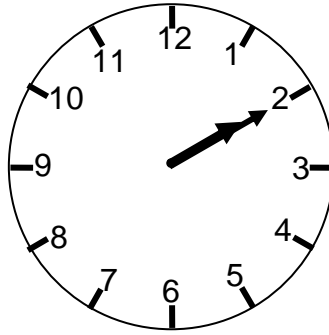
Quale orologio indica le 18 e 50?



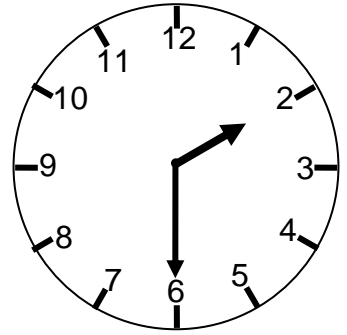
A.



B.

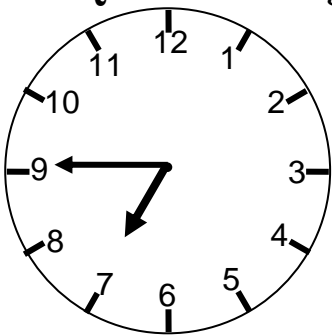


C.

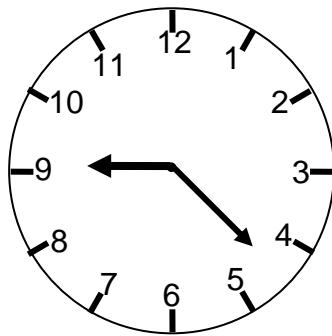


D.

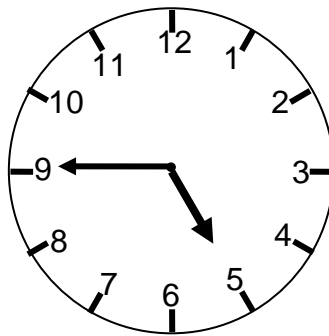
Quale orologio indica le 15 e 45?



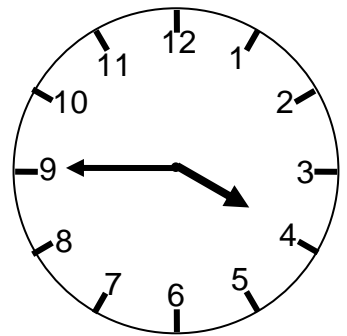
A.



B.

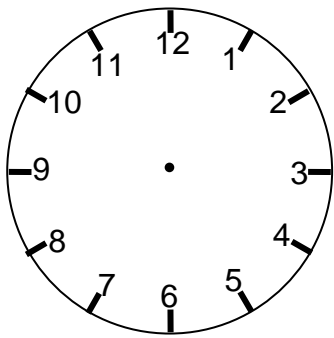


C.

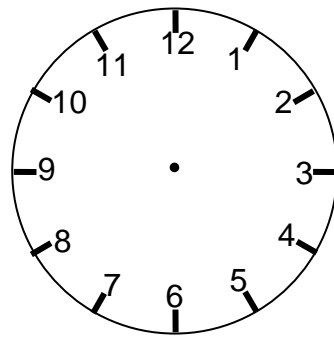


D.

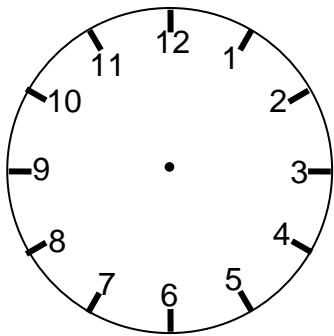
## Disegna le lancette



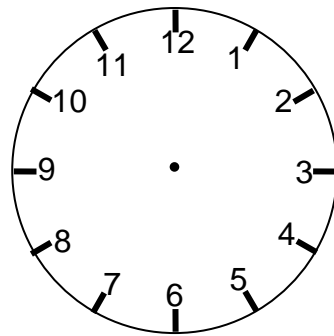
15:40



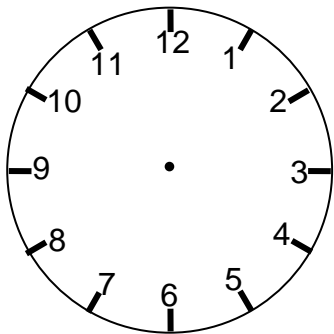
19:30



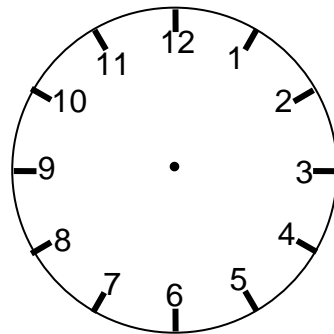
21:20



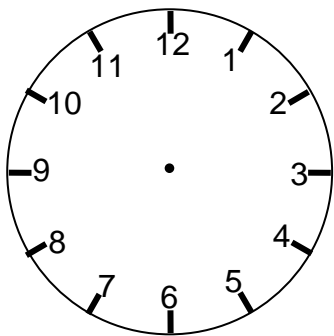
20:40



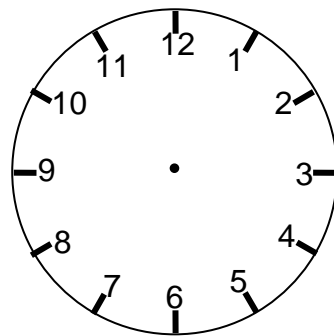
22:15



18:45




13:30



21:40

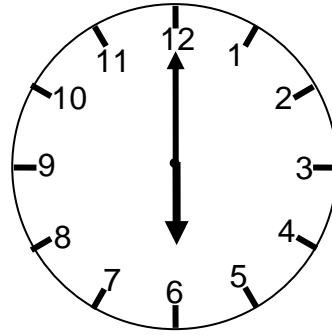


### Che ore sono?



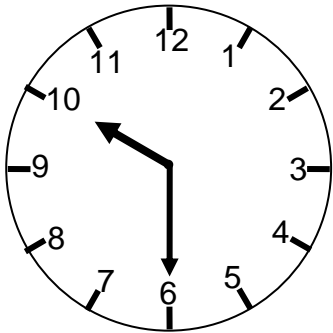
Di mattina \_\_\_\_\_

Di sera \_\_\_\_\_



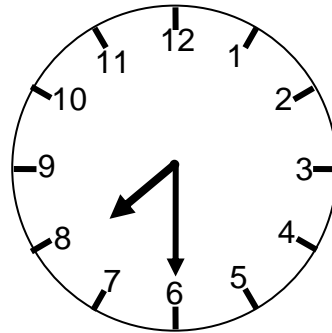
\_\_\_\_\_

\_\_\_\_\_



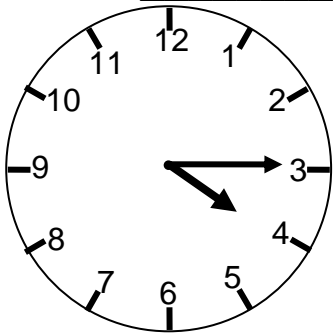
Di mattina \_\_\_\_\_

Di sera \_\_\_\_\_



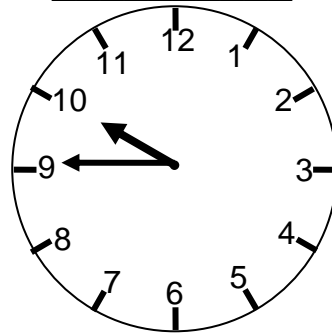
\_\_\_\_\_

\_\_\_\_\_



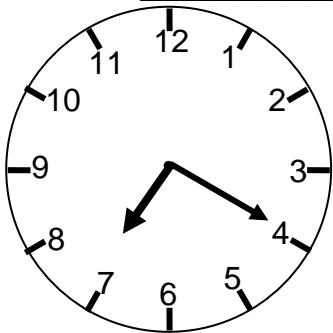
Di mattina \_\_\_\_\_

Di sera \_\_\_\_\_



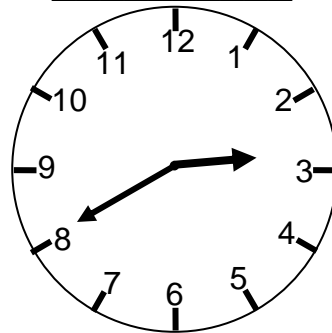
\_\_\_\_\_

\_\_\_\_\_



Di mattina \_\_\_\_\_

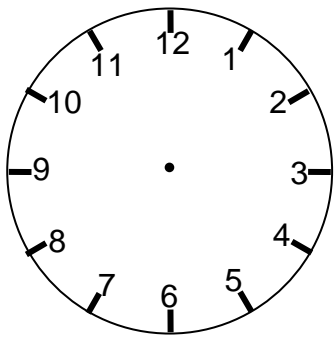
Di sera \_\_\_\_\_



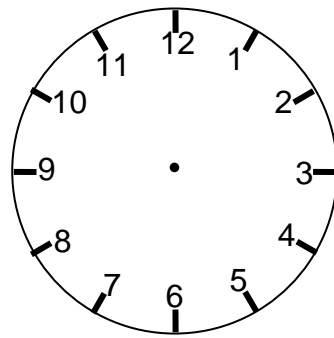
\_\_\_\_\_

\_\_\_\_\_

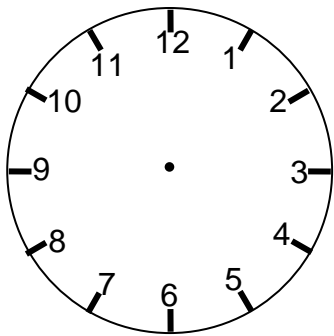
## Disegna le lancette



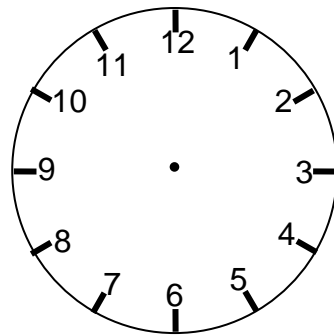
5:10



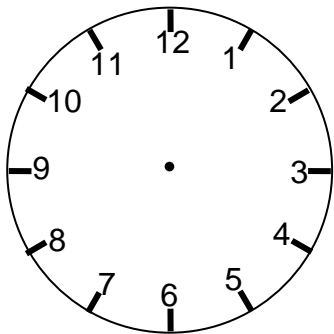
9:15



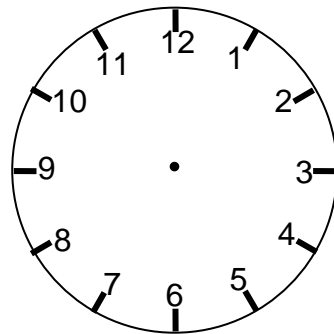
11:10



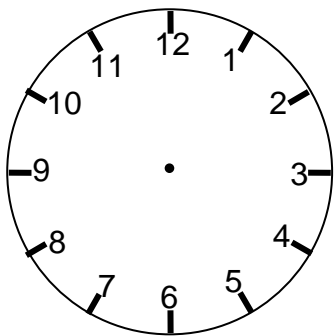
12:40



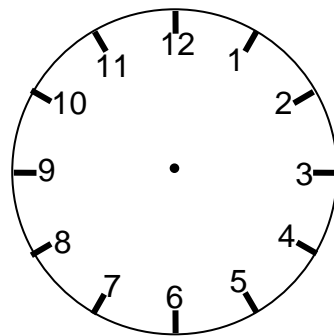
21:45



22:50

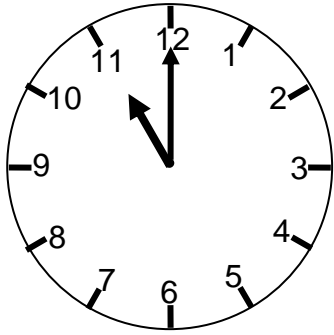


13:30



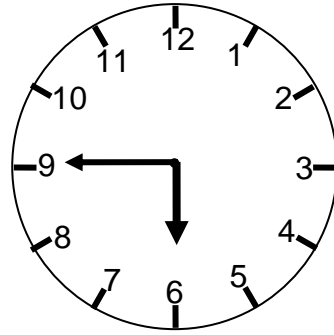
21:40

### Che ore sono?



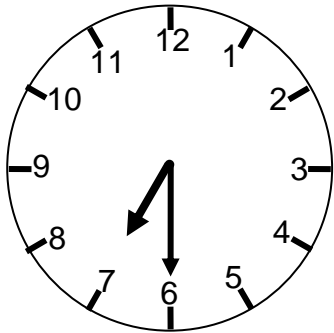
Di mattina \_\_\_\_\_

Di sera \_\_\_\_\_



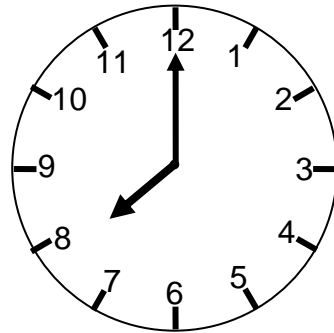
\_\_\_\_\_

\_\_\_\_\_



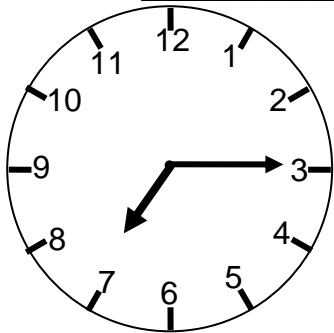
Di mattina \_\_\_\_\_

Di sera \_\_\_\_\_



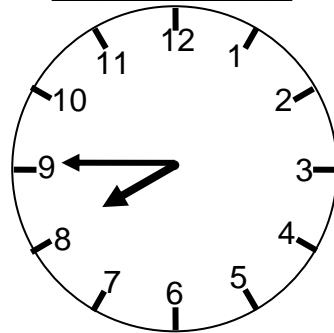
\_\_\_\_\_

\_\_\_\_\_



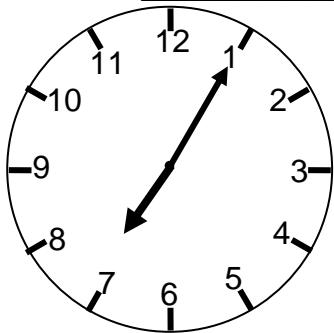
Di mattina \_\_\_\_\_

Di sera \_\_\_\_\_



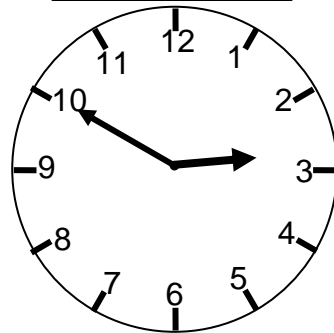
\_\_\_\_\_

\_\_\_\_\_



Di mattina \_\_\_\_\_

Di sera \_\_\_\_\_



\_\_\_\_\_

\_\_\_\_\_

## Completa le tabelle

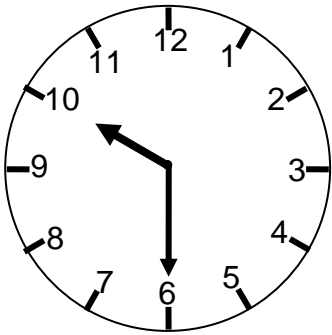
Sono le	12:10	8:45	9:20	3:30	11:50
La lancetta lunga è su	2				
La lancetta corta è su	12				

Sono le	2:15	8:25	10:10	7:10	9:40
La lancetta lunga è su					
La lancetta corta è su					

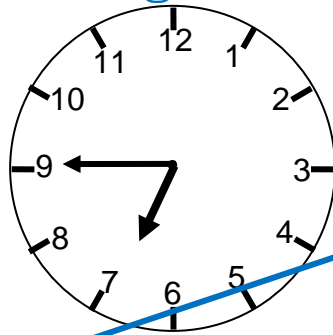
Sono le	12:10	18:45	19:20	3:25	21:50
La lancetta lunga è su					
La lancetta corta è su					

Sono le	6:30	16:30	19:25	9:25	17:50
La lancetta lunga è su					
La lancetta corta è su					

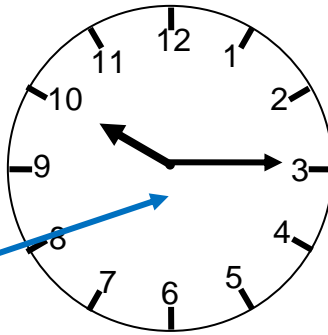
### Associa ogni orologio con la sua ora esatta collegando con una freccia



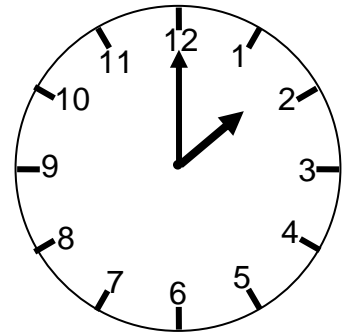
10:15



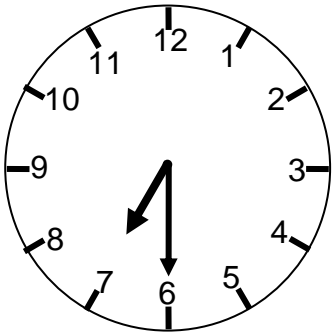
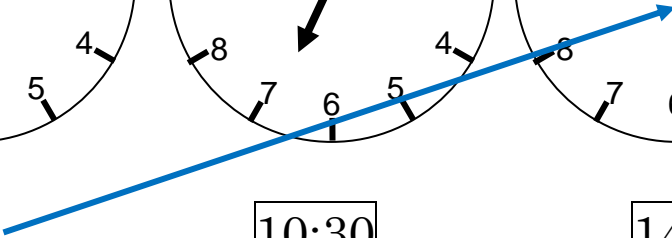
10:30



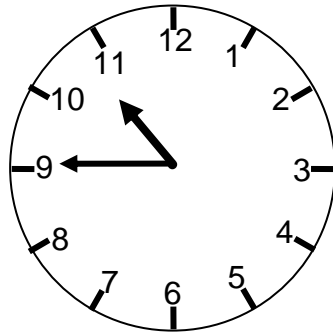
14:00



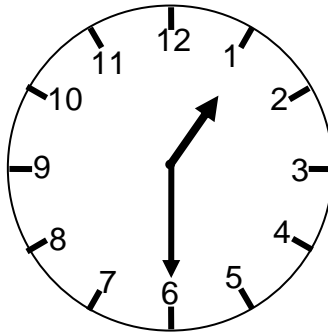
6:45



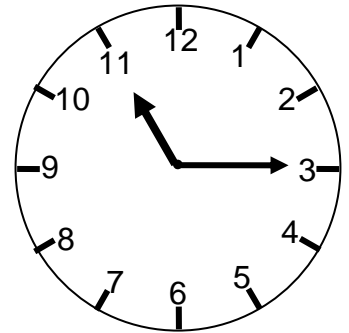
10:45




13:30



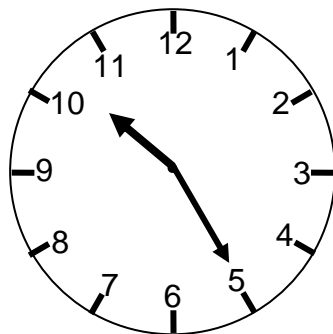
11:15



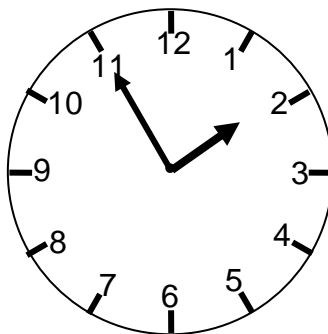
7:30



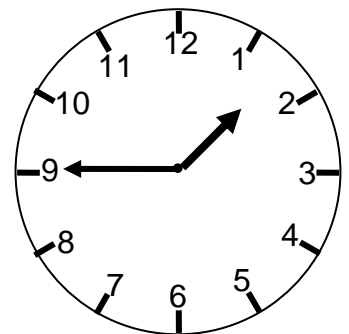
22:25



16:50



13:45



13:55


## Completa le tabelle

La lancetta lunga è sul	8	12	5	7	3
La lancetta corta è sul	5	1	4	8	2
Di mattina sono le	... : ...	... : ...	... : ...	... : ...	... : ...

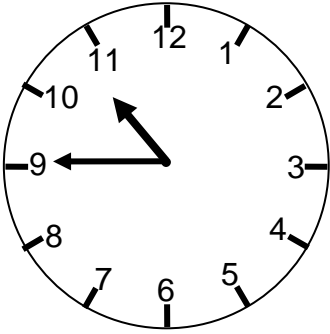
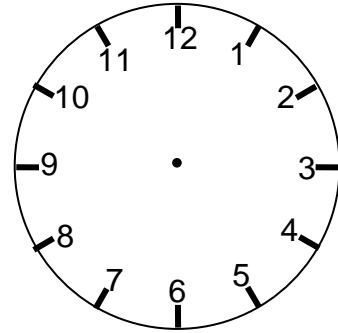
La lancetta lunga è sul	10	5	3	7	6
La lancetta corta è sul	8	12	7	3	5
Di mattina sono le	... : ...	... : ...	... : ...	... : ...	... : ...

La lancetta lunga è sul	4	3	3	4	9
La lancetta corta è sul	12	4	6	9	8
Di sera sono le	... : ...	... : ...	... : ...	... : ...	... : ...

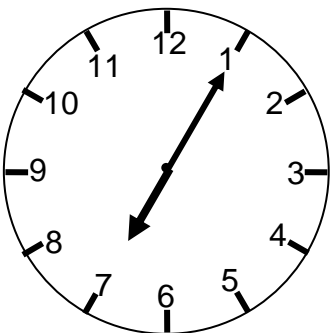
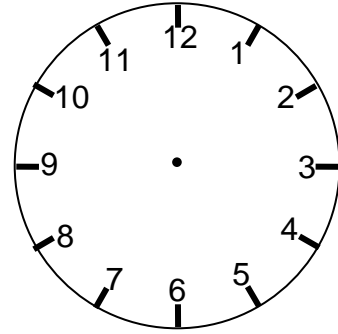
## Disegna che ore erano o che ore saranno?



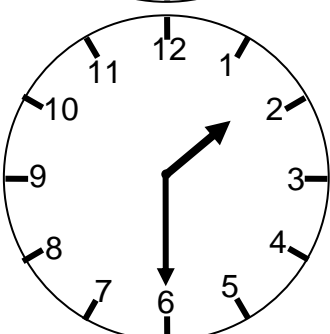
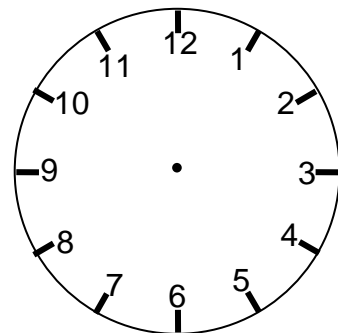
tra 10 minuti saranno



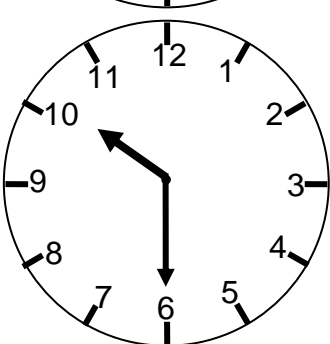
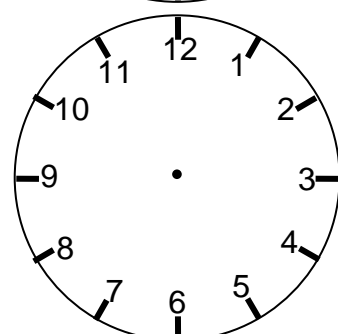
15 minuti fa erano



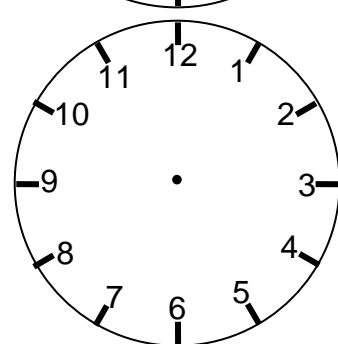
tra 10 minuti saranno



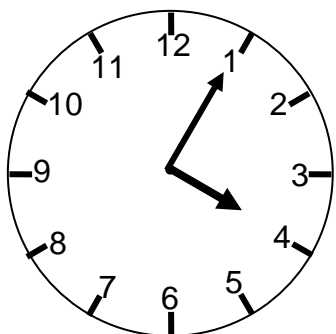
5 minuti fa erano



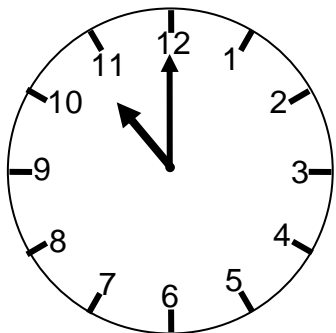
40 minuti fa erano



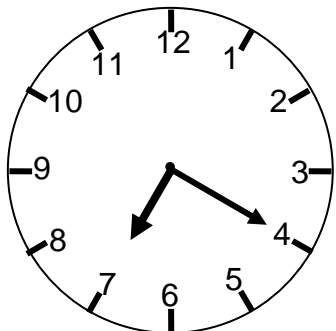
## Scrivi che ore erano o che ore saranno?



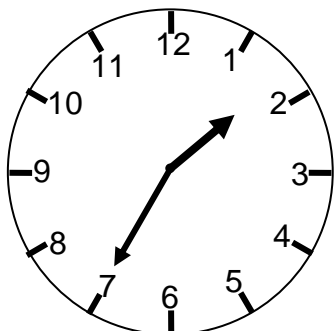
tra 15 minuti saranno le 4:20



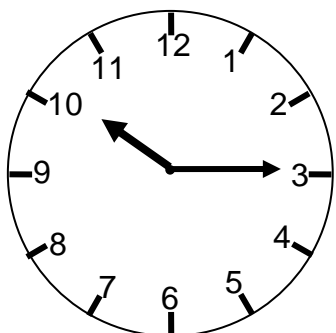
20 minuti fa erano le \_\_\_\_:\_\_\_\_



tra 30 minuti saranno le \_\_\_\_:\_\_\_\_



15 minuti fa erano le \_\_\_\_:\_\_\_\_

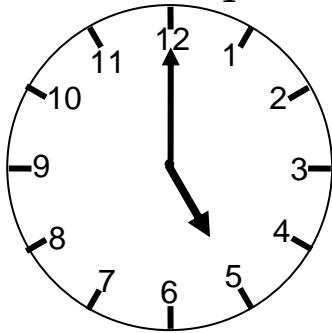


50 minuti fa erano le \_\_\_\_:\_\_\_\_

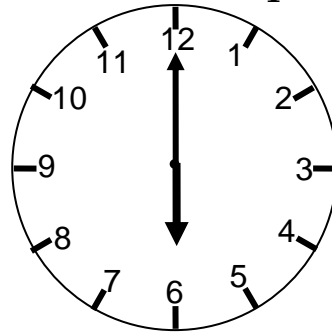


### Completa le frasi

Mario va in piscina



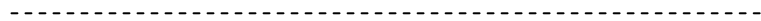
Mario torna dalla piscina



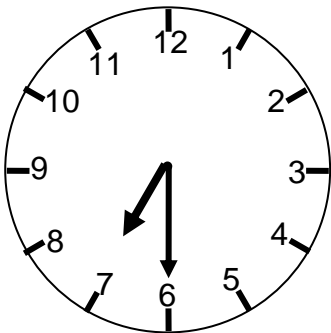
Mario va in piscina alle .....

Torna dalla piscina alle .....

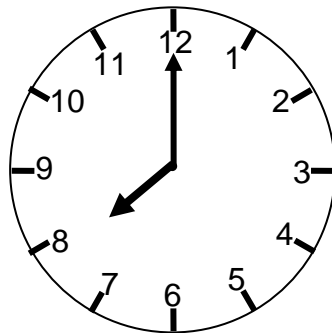
La lezione di nuoto dura .....



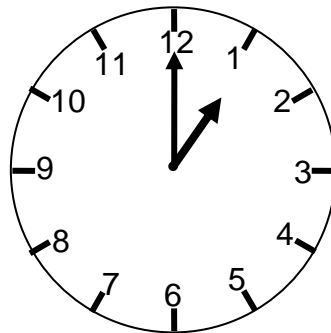
Mario esce da casa



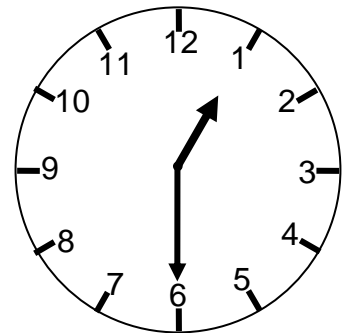
Mario arriva a scuola



Mario esce da scuola



Mario arriva a casa



Mario esce da casa alle .....

Arriva a scuola alle .....

Il viaggio è durato .....

La scuola finisce alle .....

Le lezioni sono durate .....

Mario arriva a casa alle .....

È stato lontano da casa .....



Giuseppe si è addormentato alle ore 22:15. Alle 7:40 suona la sveglia. Quante ore ha dormito?

- 7 ore e 55 minuti
- 8 ore e 45 minuti
- 9 ore e 25 minuti
- 9 ore e 35 minuti



Nicoletta ha acceso la tv alle ore 20:05, ha spento la tv alle ore 22:45. Per quante ore ha visto la tv?

- 2 ore e 50 minuti
- 1 ora e 55 minuti
- 2 ore e 40 minuti
- 1 ora e 40 minuti



Antonio è uscito da casa alle 14:45 ed è rientrato alle 16:15. Quante ore è stato fuori di casa?

- 3 ore
- 2 ore e 30 minuti
- 2 ore e 45 minuti
- 3 ore e 50 minuti

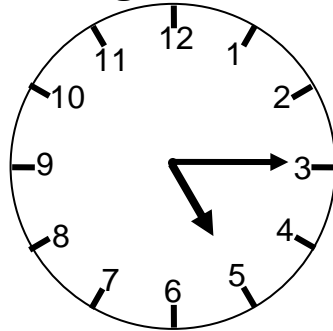


Gabriele ha iniziato a fare la torta alle 15:35 ed ha finito alle 17:45. In quante ha fatto la torta?

- 2 ore e 05 minuti
- 2 ore e 10 minuti
- 2 ore e 15 minuti
- 2 ore e 20 minuti

## Rispondi correttamente

L'orologio del parco segna le:



Mario è arrivato nel parco alle 16:30 accompagnato dalla mamma.

Da quanto tempo Mario è nel parco?

- A. da mezz'ora
- B. da un quarto d'ora
- C. da tre quarti d'ora

Il papà arriverà tra un quarto d'ora.

A che ora arriverà il papà?

- A. 17:20
- B. 18:30
- C. 17:30

Con la macchina di papà ci vorranno appena dieci minuti per tornare a casa tutti insieme.

A che ora tornerà a casa la famiglia di Mario?

- A. 17:20
- B. 17:40
- C. 18:10

## A che ora all'incirca ...



Alle 8:00 Marco inizia a fare colazione. A che ora all'incirca dovrebbe finire?

Alle ore \_\_\_\_ : \_\_\_\_



Alle 22:00 inizia la partita della Nazionale italiana. A che ora all'incirca finirà la partita?

Alle ore \_\_\_\_ : \_\_\_\_



Alle 19:00 Pippo mette gli spaghetti nell'acqua bollente. A che ora all'incirca potrebbero essere cotti?

Alle ore \_\_\_\_ : \_\_\_\_



Alle 17:00 Luisella va a fare la doccia. A che ora all'incirca potrebbe finire?

Alle ore \_\_\_\_ : \_\_\_\_



Alle 18:30 Mariella va a vedere al cinema un film di pirati. A che ora potrebbe uscire dal cinema?

Alle ore \_\_\_\_ : \_\_\_\_



Alle 16:00 Gianna ha iniziato a mangiare un gelato. A che ora all'incirca potrebbe finire di mangiare il gelato?

Alle ore \_\_\_\_ : \_\_\_\_